











MATH

choice board

What is this shape?  _____	What number is this?  _____	What comes before? 21 _____	How many ways can you make 10? ex. 5+5 _____	What are the missing numbers? 15, _____, _____
What comes after? 12 _____	What are the missing numbers? 19, _____, _____	What number is this?  _____	What is this shape?  _____	What comes after? _____
What comes before? 14 _____	What is this shape?  _____	 Free Space	What comes after? 33 _____	What number is this?  _____
What are the missing numbers? 21, _____, _____	How many ways can you make 5? ex. 1+4 _____	What is this shape?  _____	What are the missing numbers? _____, _____, 10	What comes before? 16 _____
What is this shape?  _____	What comes before? 9 _____	What comes after? 30 _____	How many ways can you make 8? ex. 2+6 _____	What is this shape?  _____